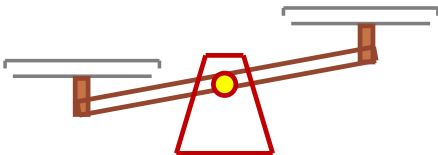
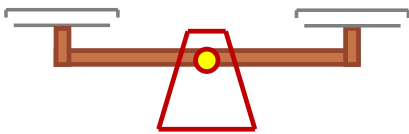
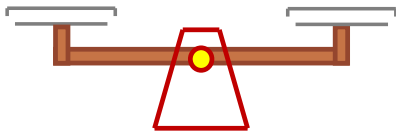
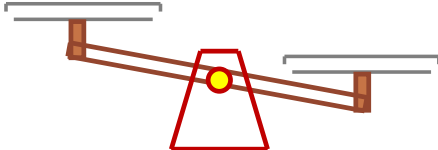
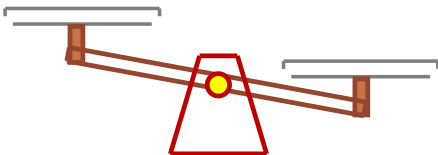
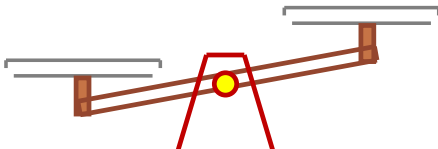


Heavier / lighter with a balance scale

Grade 2 Measurement Worksheet

Circle the correct answers.

 <p>Which is lighter?</p>			 <p>Which is heavier?</p>		
Apple	Pencil case	Same	Pitcher	Lamp	Same
 <p>Which is lighter?</p>			 <p>Which is heavier?</p>		
Apple	Tennis ball	Same	Tennis ball	Book	Same
 <p>Which is heavier?</p>			 <p>Which is lighter?</p>		
Book	Lamp	Same	Pencil Case	Book	Same

Which is heavier: the pitcher or the pencil case? _____