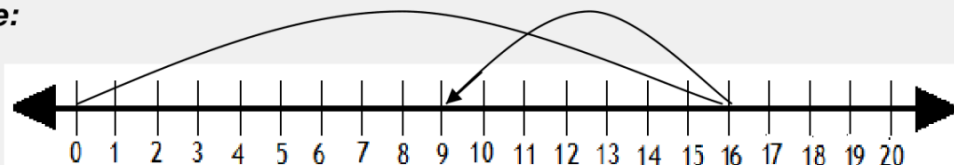


Subtracting using number lines

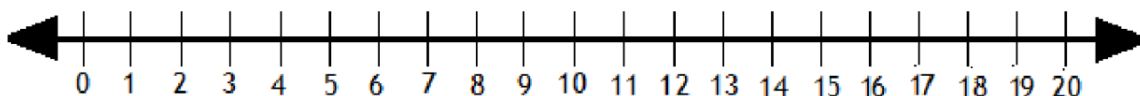
Subtract by drawing hops on the number line.

Example:



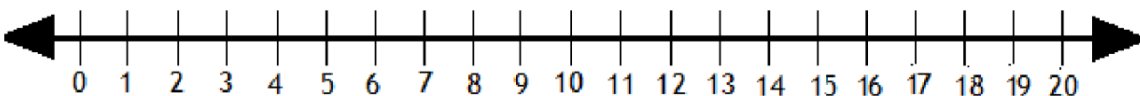
$$16 - 7 = \boxed{9}$$

1.



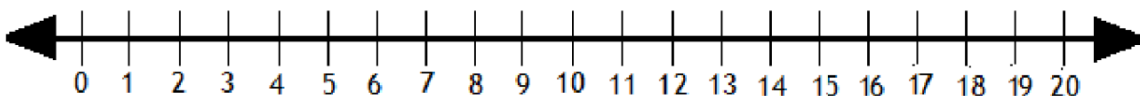
$$16 - 13 = \boxed{}$$

2.



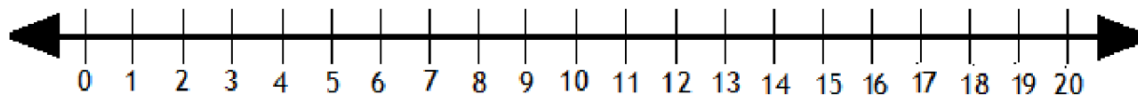
$$11 - 9 = \boxed{}$$

3.



$$15 - 8 = \boxed{}$$

4.



$$16 - 11 = \boxed{}$$