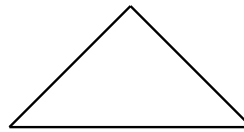


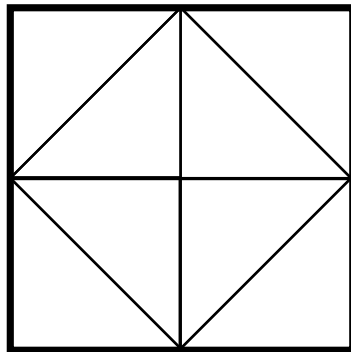
Area of rectangles measured in triangles

Grade 2 Geometry Worksheet

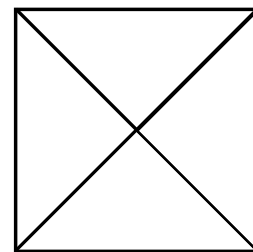
Determine the area of each shape by counting the number of triangles that are needed to cover the shape.



The area of this square is  
\_\_\_\_\_ triangles.



The area of this square is  
\_\_\_\_\_ triangles.



The area of this rectangle is  
\_\_\_\_\_ triangles.

The area of this rectangle is  
\_\_\_\_\_ triangles.