



Elapsed time - forward and backwards


Draw the clock hands to show the time it was or will be.




What time will it be in 4 hours 7 minutes?




What time was it 2 hours 46 minutes ago?




What time was it 2 hours 4 minutes ago?



What time will it be in 4 hours 40 minutes?



What time was it 3 hours 56 minutes ago?



What time will it be in 5 hours 27 minutes?