

**Describing quadrilaterals**

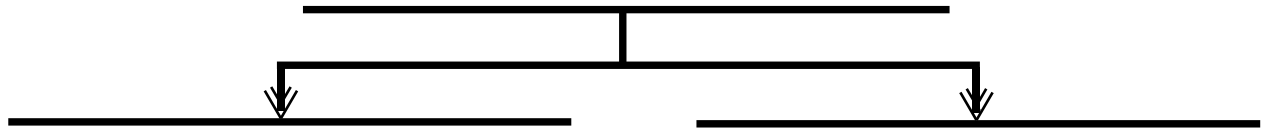
Grade 3 Geometry Worksheet

Fill in the blanks with words from the word bank.

Rectangle    Trapezoid    Square  
Parallelogram    Rhombus    Quadrilateral

\_\_\_\_\_

A shape that has 4 sides and 4 angles.

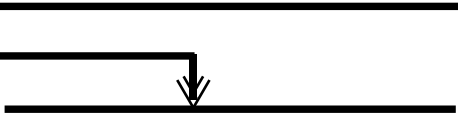
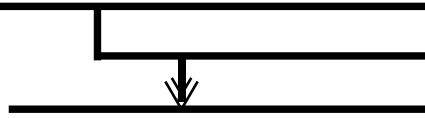


\_\_\_\_\_

A quadrilateral that has 2 pairs of parallel sides.

\_\_\_\_\_

A quadrilateral that has 1 pair of parallel sides.

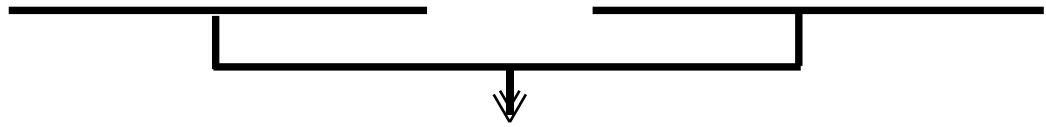


\_\_\_\_\_

A parallelogram where all angles are equal (right angles) and opposite sides are equal.

\_\_\_\_\_

A parallelogram where opposite angles are equal and all sides are equal.



\_\_\_\_\_