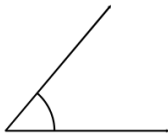


Classifying angles (acute / obtuse / right)

Measure the angle with a protractor. Is it acute, obtuse or a right angle?

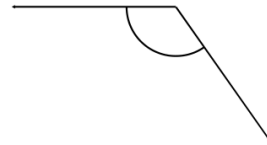
1.



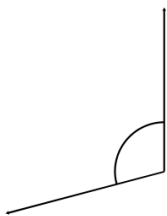
2.



3.



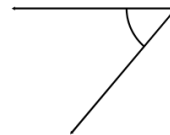
4.



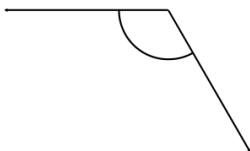
5.



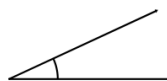
6.



7.



8.



9.

