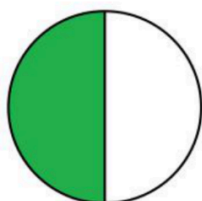


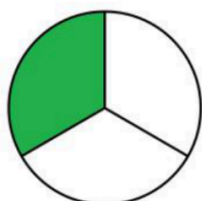
Comparing proper fractions

Write > (greater than), < (less than) or = (equal to) between the fractions.

1)

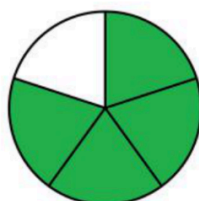


$\frac{1}{2}$

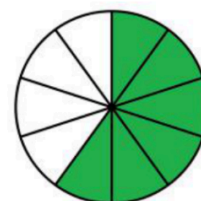


$\frac{1}{3}$

2)

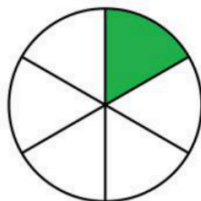


$\frac{4}{5}$

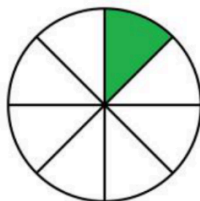


$\frac{6}{10}$

3)

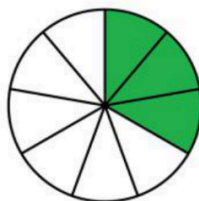


$\frac{1}{6}$

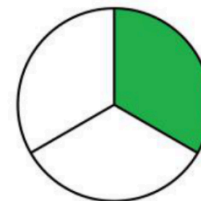


$\frac{1}{8}$

4)

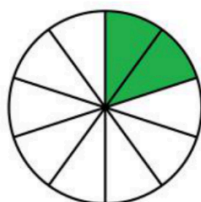


$\frac{3}{9}$

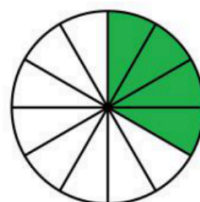


$\frac{1}{3}$

5)

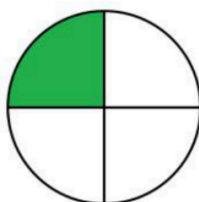


$\frac{2}{10}$

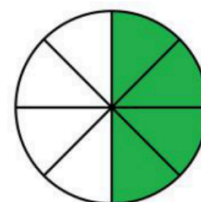


$\frac{4}{12}$

6)

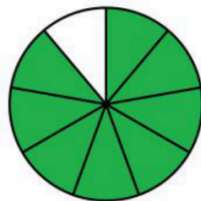


$\frac{1}{4}$

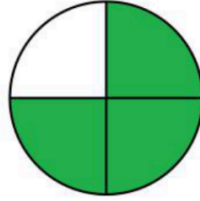


$\frac{4}{8}$

7)

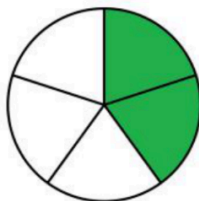


$\frac{7}{8}$

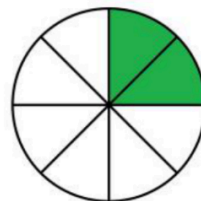


$\frac{3}{4}$

8)



$\frac{2}{5}$



$\frac{2}{7}$