


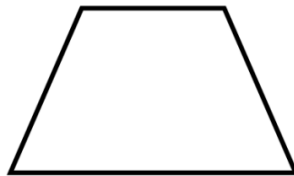
Classifying quadrilaterals

Classify each quadrilateral as a **square**, **rectangle**, **rhombus**, **parallelogram** or **trapezoid**. Mark all right angles and parallel lines.

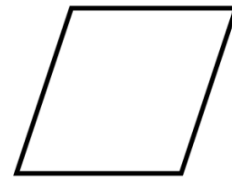
1)




2)




3)



4)



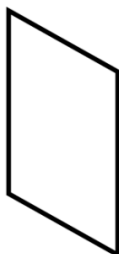
5)



6)



7)



8)



9)

