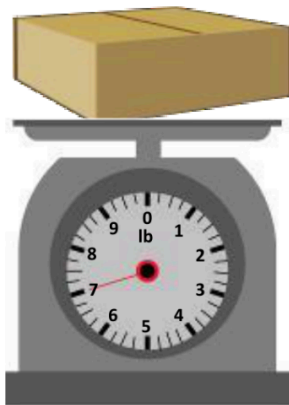
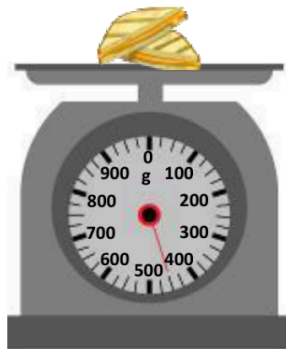


Measure and compare weights

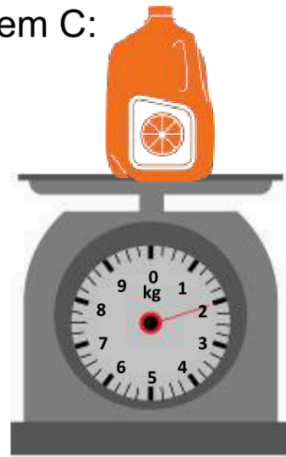
Item A:



Item B:



Item C:



Note: 1 kg = 2.2 lbs

1. Write down the measurement of each item.

Item A: _____ Item B: _____ Item C: _____

2. Convert all the measurements into pounds. Then, rank the items from lightest to heaviest by writing 1-3.

Item A: _____ Item B: _____ Item C: _____

3. Now convert all the measurements into grams. Then, rank the items from lightest to heaviest by writing 1-3.

Item A: _____ Item B: _____ Item C: _____

4. Did you get the same ranking? Why?
