

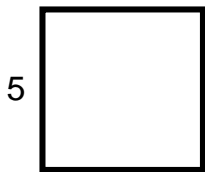
Perimeter and area of triangles and quadrilaterals

Grade 6 Geometry Worksheet

All dimensions shown are inches.

Find the perimeter and area of each shape.

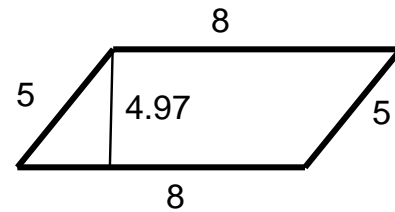
1)



P = _____

A = _____

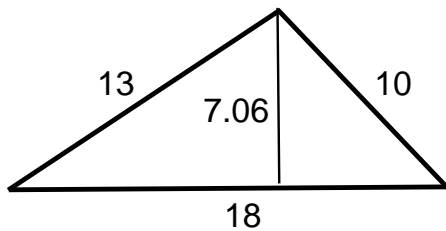
2)



P = _____

A = _____

3)



P = _____

A = _____

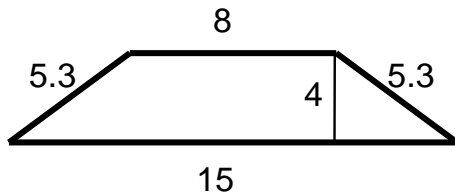
4)



P = _____

A = _____

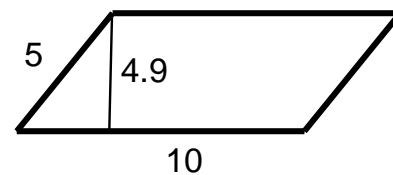
5)



P = _____

A = _____

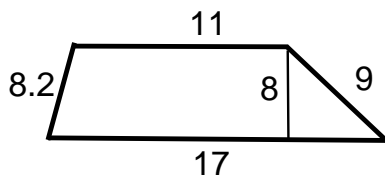
6)



P = _____

A = _____

7)



8)

