







Coin collection pictograph

Five friends recorded the number of their coin collection.

Use the information to answer the questions.

Name	Number of coins
Noah	
Leo	
Jack	
Zoey	
Olivia	



 = 8 coins

- How many coins did Jack collect? _____
- Who collected 24 coins? _____
- Who collected the same number of coins? _____
- How many coins did Leo and Zoey collect? _____
- Two friends collected a total of 80 coins. Who were they? _____
- How many more coins did Olivia collect than Zoey? _____
- Who collected more coins than Noah but less than Olivia? _____
- If Zoey collects 12 more coins, how many coins would she have? _____