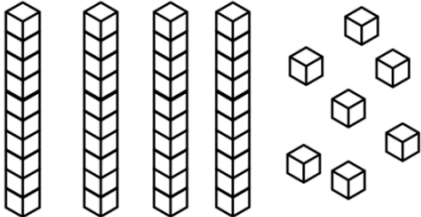
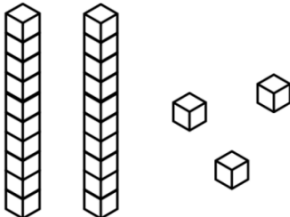
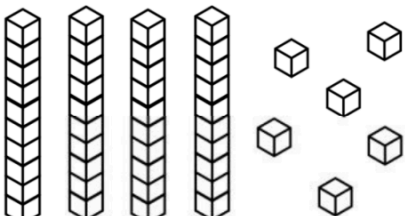
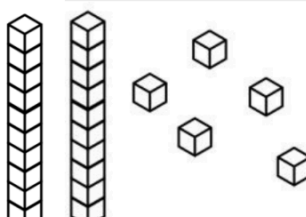
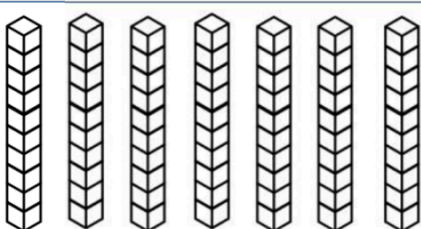
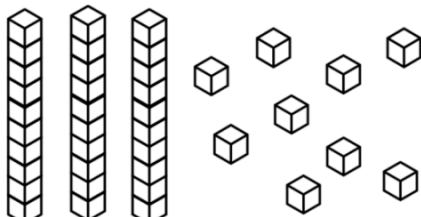


Counting tens and ones

Find the total number of blocks.

	$= \underline{\quad} \text{ tens} + \underline{\quad} \text{ ones} = \underline{\quad}$
	$= \underline{\quad} \text{ tens} + \underline{\quad} \text{ ones} = \underline{\quad}$
	$= \underline{\quad} \text{ tens} + \underline{\quad} \text{ ones} = \underline{\quad}$
	$= \underline{\quad} \text{ tens} + \underline{\quad} \text{ ones} = \underline{\quad}$
	$= \underline{\quad} \text{ tens} + \underline{\quad} \text{ ones} = \underline{\quad}$
	$= \underline{\quad} \text{ tens} + \underline{\quad} \text{ ones} = \underline{\quad}$