


Circles - circumference (metric)

Find the missing circumference, diameter or radius of each circle.
Label the circles.


1)



Radius: 4 m

Circumference:


2)



Diameter:

Circumference: 43.96 cm


3)



Radius:

Circumference: 100.48 cm


4)



Diameter: 22 cm

Circumference:


5)



Radius:

Circumference: 131.88 cm


6)



Diameter: 36 mm

Circumference:


7)



Radius: 8 m

Circumference:


8)



Diameter: 40 cm

Circumference:

9)



Radius:

Circumference: 106.76 cm