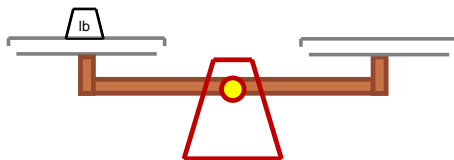
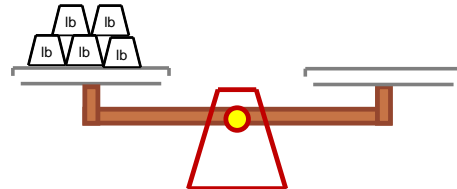


Measure weights in pounds

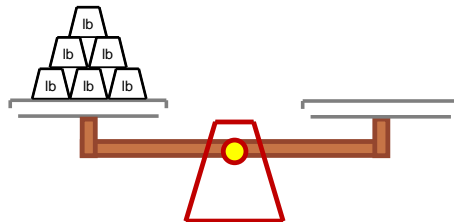
Grade 2 Measurement Worksheet



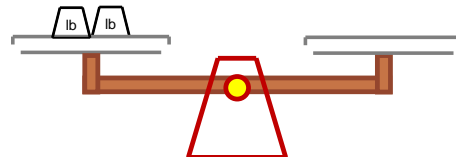
The newspaper weighs \_\_\_\_\_ pound.



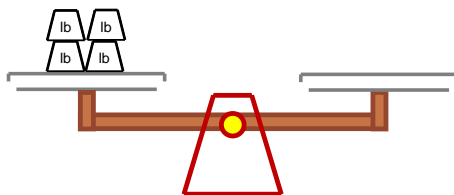
The chair weighs \_\_\_\_\_ pounds.



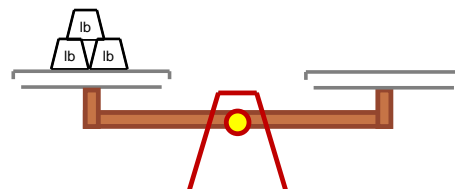
The laundry weighs \_\_\_\_\_ pounds.



The milk carton weighs \_\_\_\_\_ pounds.



The bag of flour weighs \_\_\_\_\_ pounds.



The bag of cookies weighs \_\_\_\_\_ pounds.

How much heavier is the laundry than the newspaper? \_\_\_\_\_