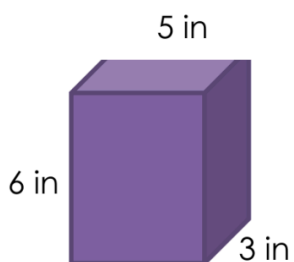


Volume of rectangular prisms

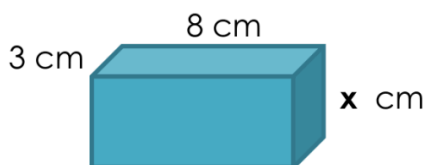
Volume = length x width x height

1.



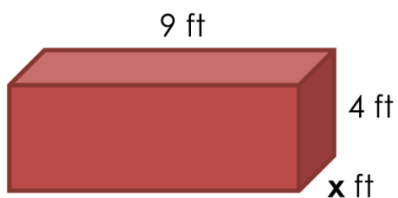
Volume = _____ x _____ x _____
= _____ in³

2.



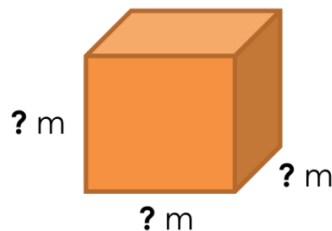
If the volume of the prism is 120 cm³,
x = _____

3.



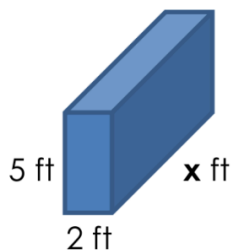
If the volume of the prism is 72 ft³,
x = _____

4.



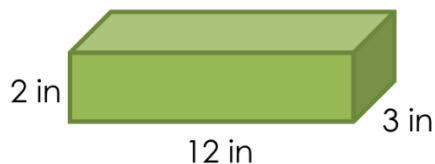
If the volume of the cube is 125 m³,
each side of this cube is _____m.

5.



If the volume of the prism is 100 ft³,
x = _____

6.



Volume = _____ x _____ x _____
= _____ in³