


Elapsed time - forwards and backwards


Draw the clock hands to show the time it was or will be.

1.




What time will it be in 5 hours?

2.




What time will it be in 1 hour 30 minutes?

3.




What time will it be in 5 hours 30 minutes?

4.




What time will it be in 1 hour 30 minutes?

5.



What time will it be in 2 hours?

6.



What time was it 2 hours ago?