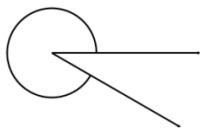


Measure and classify angles

Measure the angle with a protractor.
Is it acute, obtuse, right, straight or a reflex angle?

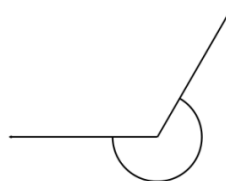
1)



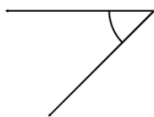
2)



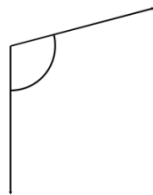
3)



4)



5)



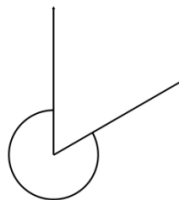
6)



7)



8)



9)