
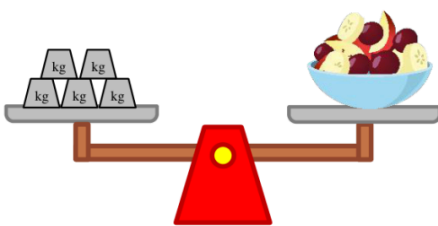
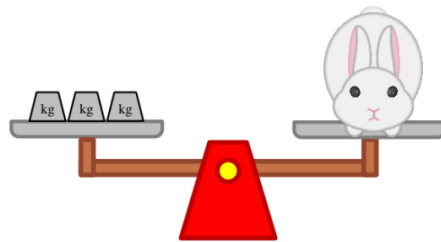


**Measure weights in kilograms**

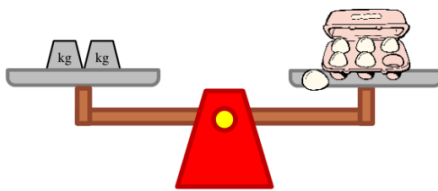
 = 1 kilogram



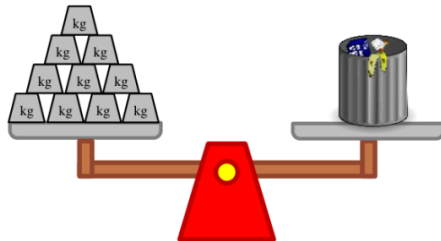
The fruit salad weighs \_\_\_\_ kg.



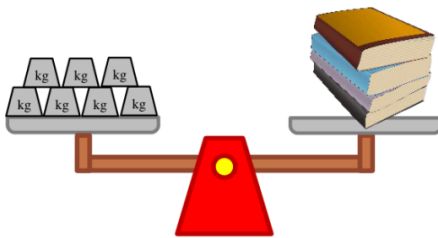
The rabbit weighs \_\_\_\_ kg.



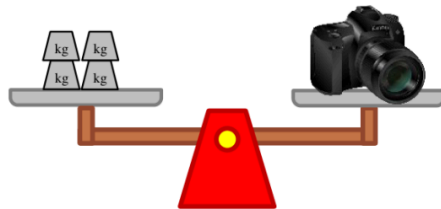
The carton of eggs weighs \_\_\_\_ kg.



The trash can weighs \_\_\_\_ kg.



The stack of books weighs \_\_\_\_ kg.



The camera weighs \_\_\_\_ kg.

How much heavier is the stack of books than the rabbit? \_\_\_\_\_

How much heavier is the trash can than the camera? \_\_\_\_\_