


Dividing into equal groups

Divide the food between the kids & write the division equation.




___ ÷ ___ = ___

How many bananas does each kid get? _____




___ ÷ ___ = ___

How many muffins does each kid get? _____



___ ÷ ___ = ___

How many pretzels does each kid get? _____



___ ÷ ___ = ___

How many cherries does each kid get? _____