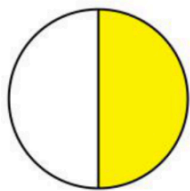
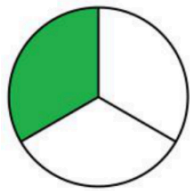
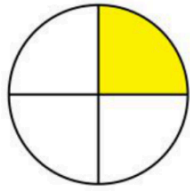
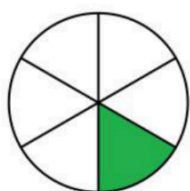
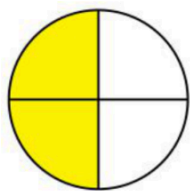
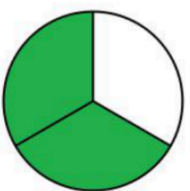
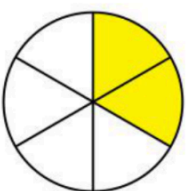
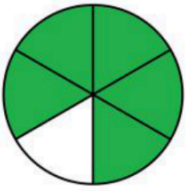
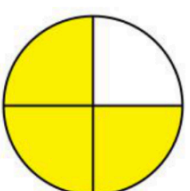
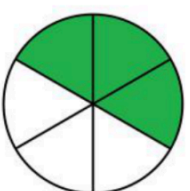


Matching fractions to a picture

What fraction of each shape is colored?

Circle the correct answer.

	$\frac{1}{4}$	$\frac{1}{2}$	$\frac{4}{7}$	$\frac{1}{6}$
	$\frac{1}{2}$	$\frac{1}{3}$	$\frac{2}{3}$	$\frac{1}{4}$
	$\frac{1}{3}$	$\frac{3}{4}$	$\frac{1}{4}$	$\frac{2}{4}$
	$\frac{1}{2}$	$\frac{1}{3}$	$\frac{1}{5}$	$\frac{1}{6}$
	$\frac{2}{3}$	$\frac{2}{4}$	$\frac{1}{3}$	$\frac{2}{2}$

	$\frac{1}{2}$	$\frac{2}{3}$	$\frac{2}{4}$	$\frac{1}{4}$
	$\frac{1}{6}$	$\frac{2}{4}$	$\frac{2}{5}$	$\frac{2}{6}$
	$\frac{1}{6}$	$\frac{1}{5}$	$\frac{5}{6}$	$\frac{1}{4}$
	$\frac{1}{4}$	$\frac{3}{4}$	$\frac{1}{3}$	$\frac{2}{3}$
	$\frac{1}{3}$	$\frac{1}{6}$	$\frac{3}{5}$	$\frac{3}{6}$