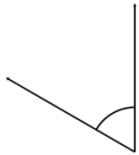


**Measure and classify angles**

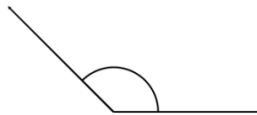
Measure the angle with a protractor.  
Is it acute, obtuse or a right angle?

1)



\_\_\_\_\_

2)



\_\_\_\_\_

3)



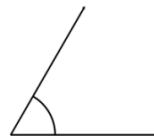
\_\_\_\_\_

4)



\_\_\_\_\_

5)



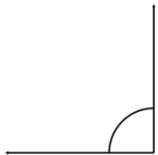
\_\_\_\_\_

6)



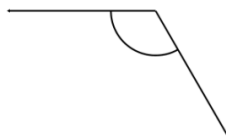
\_\_\_\_\_

7)



\_\_\_\_\_

8)



\_\_\_\_\_

9)



\_\_\_\_\_