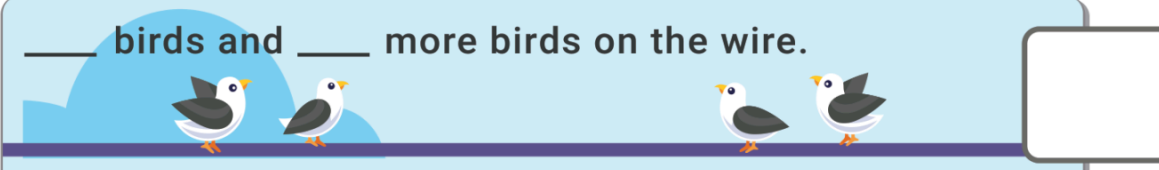


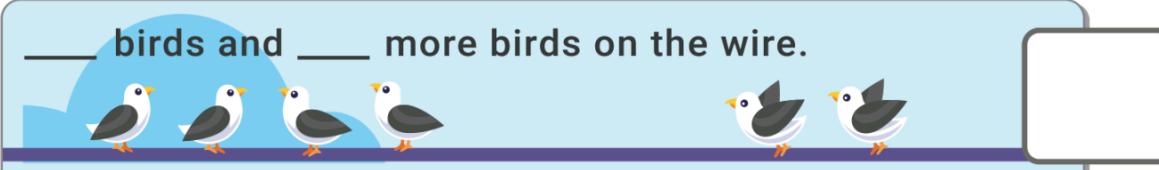
Counting and combining (1-10)

Count the birds. Fill in the blanks. How many birds in all?

___ birds and ___ more birds on the wire.



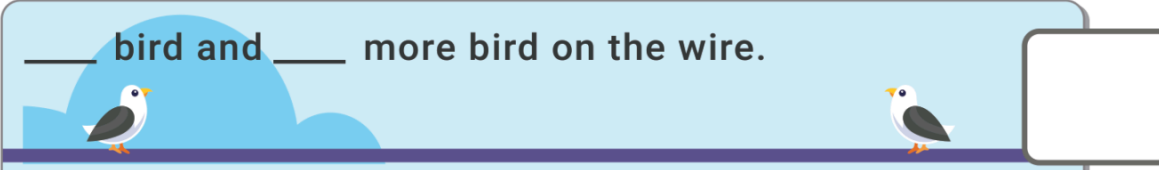
___ birds and ___ more birds on the wire.



___ birds and ___ more birds on the wire.



___ bird and ___ more bird on the wire.



___ birds and ___ more birds on the wire.



___ birds and ___ more bird on the wire.

