
































Cupcakes pictograph

Kathy baked cupcakes from Monday to Friday for her friends.
Use the information to answer the questions.

Number of cupcakes

Monday	     
Tuesday	       
Wednesday	   
Thursday	      
Friday	    

 = 1 cupcake

- How many cupcakes did Kathy bake on Friday? _____
- On what day did she bake 7 cupcakes? _____
- On what day did she bake the fewest cupcakes? _____
- On what day did she bake the most cupcakes? _____
- How many cupcakes did she bake on Thursday and Friday together? _____