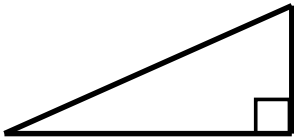
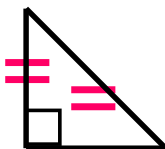
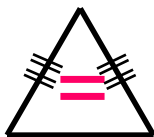
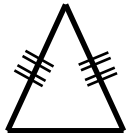

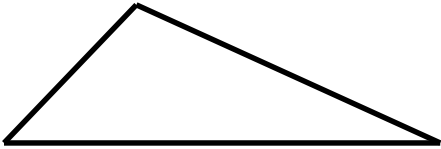



Classifying triangles

Grade 3 Geometry Worksheet

Circle two words to describe each triangle.

	Acute	Scalene
	Obtuse	Isosceles
	Right	Equilateral
	Acute	Scalene
	Obtuse	Isosceles
	Right	Equilateral
	Acute	Scalene
	Obtuse	Isosceles
	Right	Equilateral
	Acute	Scalene
	Obtuse	Isosceles
	Right	Equilateral
	Acute	Scalene
	Obtuse	Isosceles
	Right	Equilateral
	Acute	Scalene
	Obtuse	Isosceles
	Right	Equilateral
	Acute	Scalene