







Count and Write



Count the circles, Write the numbers. Find the sum.




 +
 
 _____ + _____ =


 +
 
 _____ + _____ =


 +
 
 _____ + _____ =


 +
 
 _____ + _____ =


 +
 
 _____ + _____ =


 +
 
 _____ + _____ =