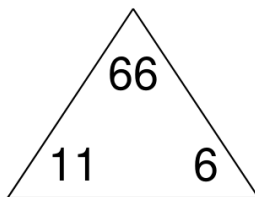


Multiplication & division fact families

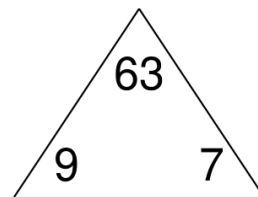
Complete each family of facts.

1.



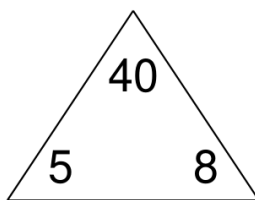
$$\begin{array}{l} \square \times \square = \square \\ \square \times \square = \square \\ \square \div \square = \square \\ \square \div \square = \square \end{array}$$

2.



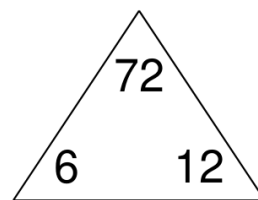
$$\begin{array}{l} \square \times \square = \square \\ \square \times \square = \square \\ \square \div \square = \square \\ \square \div \square = \square \end{array}$$

3.



$$\begin{array}{l} \square \times \square = \square \\ \square \times \square = \square \\ \square \div \square = \square \\ \square \div \square = \square \end{array}$$

4.



$$\begin{array}{l} \square \times \square = \square \\ \square \times \square = \square \\ \square \div \square = \square \\ \square \div \square = \square \end{array}$$