


Elapsed time - forward and backwards


Draw the clock hands to show the time it was or will be.

1.




What time was it 5 hours 45 minutes ago?

2.




What time will it be in 3 hours 45 minutes?

3.




What time was it 1 hour 30 minutes ago?

4.




What time will it be in 2 hours 15 minutes?

5.



What time will it be in 1 hour 15 minutes?

6.



What time will it be in 2 hours 30 minutes?