


Multiplication sentences

Circle the equation that describes the group of objects.




$5 \times 4 =$

$7 \times 2 =$

$3 \times 6 =$

$2 \times 10 =$

How many cherries are there? _____




$2 \times 4 =$

$4 \times 4 =$

$2 \times 8 =$

$4 \times 8 =$

How many spider legs are there? _____




$3 \times 3 =$

$2 \times 3 =$

$3 \times 6 =$

$2 \times 6 =$

How many penguins are there? _____



$5 \times 7 =$

$7 \times 2 =$

$7 \times 7 =$

$3 \times 7 =$

How many roses are there?
