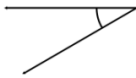


Classifying angles (acute / obtuse / right)

Classify the angles as acute, obtuse or right.

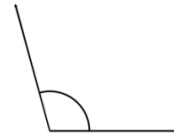
1)



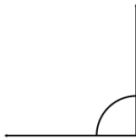
2)



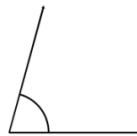
3)



4)



5)



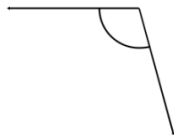
6)



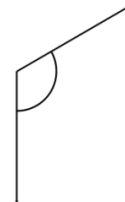
7)



8)



9)



Draw and label one acute, one obtuse and one right angle.

Draw and label one acute, one obtuse and one right angle.