

ADDITION FACTS

Doubles & Sums to 10

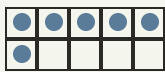
Objective: Add small numbers. Learn your doubles so you just know them.

INSTRUCTION

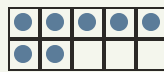
Count both groups, then write how many in all. Learn your doubles so you just know them!

EXAMPLE

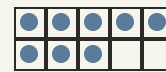
A double is a number added to itself.



$$3 + 3 = 6$$



$$5 + 2 = 7$$



$$4 + 4 = 8$$

INDEPENDENT PRACTICE

Write each sum. Watch for your doubles!

1. $1 + 1 = \square$

2. $2 + 2 = \square$

3. $3 + 3 = \square$

4. $4 + 4 = \square$

5. $5 + 5 = \square$

6. $9 + 1 = \square$

7. $4 + 5 = \square$

8. $4 + 3 = \square$

9. $8 + 1 = \square$

10. $2 + 1 = \square$

11. $2 + 3 = \square$

12. $2 + 8 = \square$

13. $4 + 6 = \square$

14. $1 + 3 = \square$

15. $1 + 8 = \square$

16. $1 + 5 = \square$

17. $1 + 4 = \square$

18. $6 + 4 = \square$

19. $3 + 4 = \square$

20. $5 + 4 = \square$

21. $8 + 2 = \square$

22. $6 + 1 = \square$

23. $6 + 3 = \square$

24. $6 + 2 = \square$

I solved by: counted on knew my double used a ten frame

TEACHER EDITION

ADDITION FACTS

Doubles & Sums to 10

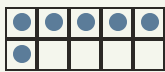
Objective: Add small numbers. Learn your doubles so you just know them.

INSTRUCTION

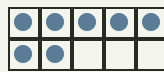
Count both groups, then write how many in all. Learn your doubles so you just know them!

EXAMPLE

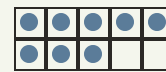
A double is a number added to itself.



$3 + 3 = 6$



$5 + 2 = 7$



$4 + 4 = 8$

INDEPENDENT PRACTICE

Write each sum. Watch for your doubles!

1. $1 + 1 =$

2. $2 + 2 =$

3. $3 + 3 =$

4. $4 + 4 =$

5. $5 + 5 =$

6. $9 + 1 =$

7. $4 + 5 =$

8. $4 + 3 =$

9. $8 + 1 =$

10. $2 + 1 =$

11. $2 + 3 =$

12. $2 + 8 =$

13. $4 + 6 =$

14. $1 + 3 =$

15. $1 + 8 =$

16. $1 + 5 =$

17. $1 + 4 =$

18. $6 + 4 =$

19. $3 + 4 =$

20. $5 + 4 =$

21. $8 + 2 =$

22. $6 + 1 =$

23. $6 + 3 =$

24. $6 + 2 =$

I solved by: counted on knew my double used a ten frame

