

KINDERGARTEN MASTERY



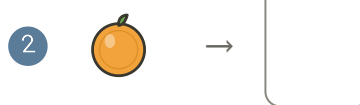
ASSESSMENT 2 OF 8 • QUARTER 3

Quarter 3 • Numerals & Ordering


Objective: *Show what you can do on your own.*

DO THIS Work on your own. Do your best thinking.

COUNT AND WRITE Write the number for each group.



CIRCLE THE NUMBER Circle the matching number.



TEACHER EDITION

KINDERGARTEN MASTERY

ASSESSMENT 2 OF 8 • QUARTER 3

Quarter 3 • Numerals & Ordering


Objective: *Show what you can do on your own.*


DO THIS Work on your own. Do your best thinking.

COUNT AND WRITE Write the number for each group.

1  → 5

2  → 1

3  → 18

4  → 9

CIRCLE THE NUMBER Circle the matching number.

1  1 9 10

2  8 15 17

3  5 8 20

4 3 14 17

TEACHER NOTES Answer key & guidance

Answers: see page
Common error: Treating the picture and the symbol as unrelated.

Strategy: Link the model to the numeral or equation aloud.
Prompt: "Show me how you know."

