

**KINDERGARTEN MASTERY** ASSESSMENT 6 OF 8 • QUARTER 2

Quarter 2 • Geometry, Measurement or Data

Objective: *Show what you can do on your own.*

**DO THIS** Work on your own. Do your best thinking.

**DISCOVER** Shapes have sides and corners.




triangle



diamond



rectangle



square

**COUNT THE SIDES** Write how many sides.

1



sides:

2



sides:

3



sides:

4



sides:

TEACHER EDITION

**KINDERGARTEN MASTERY** ASSESSMENT 6 OF 8 • QUARTER 2

Quarter 2 • Geometry, Measurement or Data

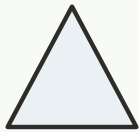
Objective: *Show what you can do on your own.*

**DO THIS** Work on your own. Do your best thinking.

**DISCOVER** Shapes have sides and corners.




triangle



diamond



rectangle



square

**COUNT THE SIDES** Write how many sides.

1



sides: 3

2



sides: 4

3



sides: 4

4



sides: 4

**TEACHER NOTES** Answer key & guidance

Answers: see page  
Common error: A model that does not match the labelled number.

Strategy: Have the child build the model before recording.  
Prompt: "Show me how you know."

