


KINDERGARTEN MASTERY ASSESSMENT 6 OF 8 • QUARTER 3

Quarter 3 • Geometry, Measurement or Data

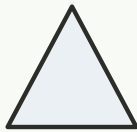
Objective: *Show what you can do on your own.*

DO THIS Work on your own. Do your best thinking.

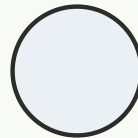
DISCOVER Shapes have sides and corners.



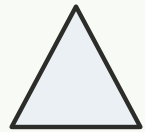
square



star



circle



triangle

COUNT THE SIDES Write how many sides.

1




sides:

2



sides:

3



sides:

4



sides:

TEACHER EDITION


KINDERGARTEN MASTERY ASSESSMENT 6 OF 8 • QUARTER 3

Quarter 3 • Geometry, Measurement or Data

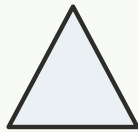
Objective: *Show what you can do on your own.*

DO THIS Work on your own. Do your best thinking.

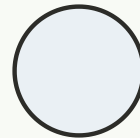
DISCOVER Shapes have sides and corners.



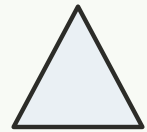
square



star



circle



triangle

COUNT THE SIDES Write how many sides.

1




sides: 4

2



sides: 5

3



sides: 0

4



sides: 3

TEACHER NOTES Answer key & guidance

Answers: see page
Common error: A model that does not match the labelled number.

Strategy: Have the child build the model before recording.
Prompt: "Show me how you know."