

RELATIONAL ADDITION

QUARTER 4 • WEEK 31

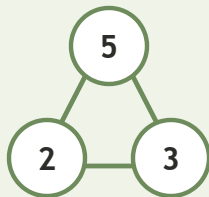
Mixed Operation Stories • Connect

Objective: *Connect addition to its number family.*

DO THIS Use the three numbers to write the fact.

CONNECT Whole and two parts.

EXAMPLE



NUMBER FAMILIES Write the fact.

1

$3 + 1 = \square$

2

$1 + 6 = \square$

3

$9 + 1 = \square$

4

$8 + 1 = \square$

To add 1: counted all counted on made ten

TEACHER EDITION

RELATIONAL ADDITION

QUARTER 4 • WEEK 31

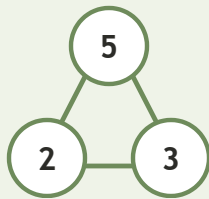
Mixed Operation Stories • Connect

Objective: *Connect addition to its number family.*

DO THIS Use the three numbers to write the fact.

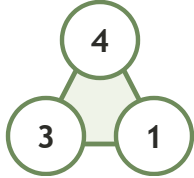
CONNECT Whole and two parts.

EXAMPLE



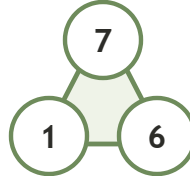
NUMBER FAMILIES Write the fact.

1



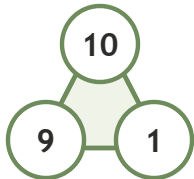
$$3 + 1 = \underline{4}$$

2



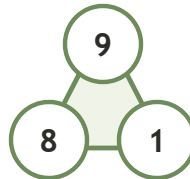
$$1 + 6 = \underline{7}$$

3



$$9 + 1 = \underline{10}$$

4



$$8 + 1 = \underline{9}$$

TEACHER NOTES Answer key & guidance

Answers: see page
Common error: Treating the picture and the symbol as unrelated.

Strategy: Link the model to the numeral or equation aloud.
Prompt: "Show me how you know."

To add 1: counted all counted on made ten

