

## NUMERALS & QUANTITY

QUARTER 1 • WEEK 4

Numerals 0 to 3 • Apply

Objective: *Use numerals with real groups.*

**DO THIS** Count each group. Circle the right numeral.

**MATCH THE NUMERAL** Circle the matching numeral.


1  0 2 3


2  1 2 3

3  0 1 3

4  0 2 3

**COUNT AND WRITE** Write the number.

1  →

2  →

3  →

4  →

I can:  read it  trace it  write it

TEACHER EDITION

## NUMERALS & QUANTITY

QUARTER 1 • WEEK 4

Numerals 0 to 3 • Apply

Objective: Use numerals with real groups.

**DO THIS** Count each group. Circle the right numeral.

**MATCH THE NUMERAL** Circle the matching numeral.

1   0 **2** 3




2  **1** 2 3

3  0 **1** 3


4   0 **2** 3

**COUNT AND WRITE** Write the number.

1  → **1**

2    → **3**

3   → **2**

4  → **1**

**TEACHER NOTES** Answer key & guidance

Answers: see page

Strategy: Read each situation aloud; let the child interpret first.

Common error: Choosing an operation before understanding the situation.

Prompt: "Show me how you know."

I can:  read it  trace it  write it

