

COUNTING & CARDINALITY

QUARTER 2 • WEEK 11

Count 8 to 10 • Connect

Objective: Match each group to its numeral.


DO THIS Count the group. Circle the matching number.

CONNECT The numeral names the amount.

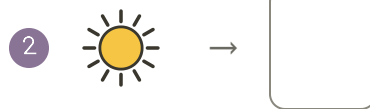

EXAMPLE



CIRCLE THE NUMBER Which number tells how many?



COUNT AND WRITE Write the number for each group.



I counted by: touching each saying the last number checking twice

COUNTING & CARDINALITY

Count 8 to 10 • Connect

Objective: *Match each group to its numeral.*


DO THIS Count the group. Circle the matching number.

CONNECT The numeral names the amount.

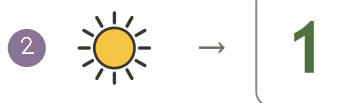

EXAMPLE



CIRCLE THE NUMBER Which number tells how many?



COUNT AND WRITE Write the number for each group.



TEACHER NOTES Answer key & guidance

Answers: see page
Common error: Treating the picture and the symbol as unrelated.

Strategy: Link the model to the numeral or equation aloud.
Prompt: "Show me how you know."

I counted by: touching each saying the last number checking twice