

COMPARISON & EQUALITY

QUARTER 1 • WEEK 7

More, Fewer, Same • Discover

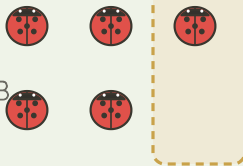
Objective: *Compare two groups to see which has more.*

DO THIS Match the rows. Circle the group with more.

DISCOVER Line them up to compare.

EXAMPLE

A




Which row has more?

$$3 > 2$$

WHICH HAS MORE? Circle the group with more.


A



1

B

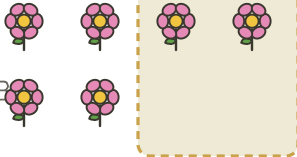
A



2

B

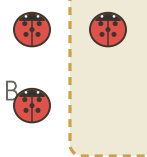
A



3

B

A



4

B

I compared by: matching counting looking at the rows

COMPARISON & EQUALITY

More, Fewer, Same • Discover

Objective: *Compare two groups to see which has more.*

DO THIS Match the rows. Circle the group with more.

DISCOVER Line them up to compare.

EXAMPLE

A



B



Which row has more?

$$3 > 2$$

WHICH HAS MORE? Circle the group with more.

A



B



A



B



A



B



A



B



TEACHER NOTES Answer key & guidance

Answers: see page
 Common error: Counting objects more than once or skipping objects.

Strategy: Introduce with the manipulatives named below.
 Prompt: "Show me how you know."

I compared by: matching counting looking at the rows