

COMPOSE & DECOMPOSE

QUARTER 3 • WEEK 23


Make 10 • Discover

Objective: See the ways to make 10.

DO THIS Color the two parts. They still make the whole.

DISCOVER Two parts of 10.

EXAMPLE



Two parts make 10.

$$2 + 8 = 10$$


FIND THE OTHER PART How many to make the whole?

1



$$1 + \square = 10$$

2



$$8 + \square = 10$$

3



$$4 + \square = 10$$

4



$$3 + \square = 10$$

Two parts make: the same whole different ways ten

COMPOSE & DECOMPOSE


Make 10 • Discover

Objective: See the ways to make 10.

DO THIS Color the two parts. They still make the whole.

DISCOVER Two parts of 10.

EXAMPLE



Two parts make 10.

$$2 + 8 = 10$$


FIND THE OTHER PART How many to make the whole?

1



$$1 + \underline{9} = 10$$

2



$$8 + \underline{2} = 10$$

3



$$4 + \underline{6} = 10$$

4



$$3 + \underline{7} = 10$$

TEACHER NOTES Answer key & guidance

Answers: see page
Common error: Counting objects more than once or skipping objects.

Strategy: Introduce with the manipulatives named below.
Prompt: "Show me how you know."

Two parts make: the same whole different ways ten