

TEEN NUMBERS



QUARTER 3 • WEEK 22

Compare and Order Teen Numbers • Spiral Review

Objective: *Practice this week's skill and earlier skills.*

DO THIS Solve each one. Use any strategy you know.

1 • COUNT Write how many.



2 • ADD Find the sum.

1 $2 + 5 = \square$

3 • SUBTRACT Find what is left.

1 $9 - 8 = \square$

4 • STORY Read and solve.

Eli had 7 stamps. He gave away 5. How many stamps are left?

5 • PROVE Solve and check.

EXAMPLE

$$9 - 8 = \underline{1}$$

$$8 + \underline{1} = 9$$

This week I: got it almost need practice





TEEN NUMBERS

Compare and Order Teen Numbers • Spiral Review

Objective: *Practice this week's skill and earlier skills.*

DO THIS Solve each one. Use any strategy you know.

1 • COUNT Write how many.



2 • ADD Find the sum.

1 $2 + 5 = \underline{7}$

3 • SUBTRACT Find what is left.

1 $9 - 8 = \underline{1}$

4 • STORY Read and solve.

Eli had 7 stamps. He gave away 5. How many stamps are left?

2

5 • PROVE Solve and check.

EXAMPLE $9 - 8 = \underline{1}$
 $8 + \underline{1} = 9$

TEACHER NOTES Answer key & guidance

Answers: see page

Strategy: Read each situation aloud; let the child interpret first.

Common error: Choosing an operation before understanding the situation.

Prompt: "Show me how you know."

This week I: got it almost need practice

