

MEASUREMENT & TIME


QUARTER 4 • WEEK 33

Money and Measurement • Spiral Review

Objective: *Practice this week's skill and earlier skills.*

DO THIS Solve each one. Use any strategy you know.

1 • COUNT Write how many.



2 • ADD Find the sum.

1 $8 + 2 = \square$

3 • SUBTRACT Find what is left.

1 $7 - 4 = \square$

4 • STORY Read and solve.

Liam had 9 buttons. He gave away 5. How many buttons are left?

5 • PROVE Solve and check.

EXAMPLE $7 - 4 = \underline{3}$
 $4 + \underline{3} = 7$

This week I: got it almost need practice

TEACHER EDITION

MEASUREMENT & TIME


QUARTER 4 • WEEK 33


Money and Measurement • Spiral Review

Objective: *Practice this week's skill and earlier skills.*

DO THIS Solve each one. Use any strategy you know.

1 • COUNT Write how many.

1  → 3

2  → 9

2 • ADD Find the sum.

1 $8 + 2 = \underline{10}$

3 • SUBTRACT Find what is left.

1 $7 - 4 = \underline{3}$

4 • STORY Read and solve.

Liam had 9 buttons. He gave away 5. How many buttons are left?

4

5 • PROVE Solve and check.

EXAMPLE $7 - 4 = \underline{3}$
 $4 + \underline{3} = 7$

TEACHER NOTES Answer key & guidance

Answers: see page
 Common error: Choosing an operation before understanding the situation.

Strategy: Read each situation aloud; let the child interpret first.
 Prompt: "Show me how you know."

This week I: got it almost need practice

