


### Classifying triangles

#### Grade 4 Geometry Worksheet

On each triangle, mark all equal sides or equal angles.

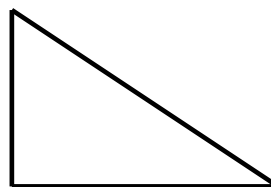
Then, classify each triangle as equilateral, isosceles, scalene or right.

1)



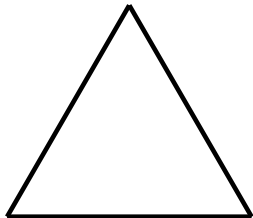
\_\_\_\_\_

2)



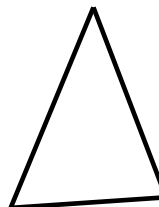
\_\_\_\_\_

3)



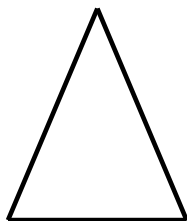
\_\_\_\_\_

4)



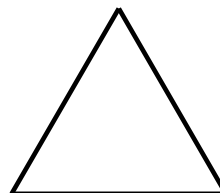
\_\_\_\_\_

5)



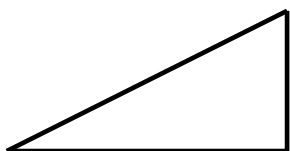
\_\_\_\_\_

6)



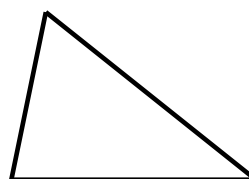
\_\_\_\_\_

7)



\_\_\_\_\_

8)



\_\_\_\_\_