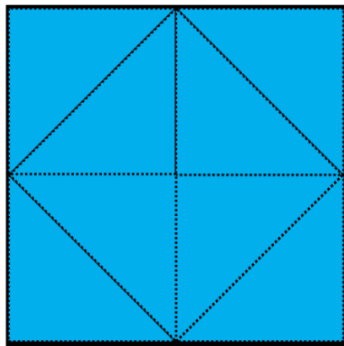


Area of rectangles measured in triangles


Determine the area of each shape by counting the number of triangles that are needed to cover the shape.



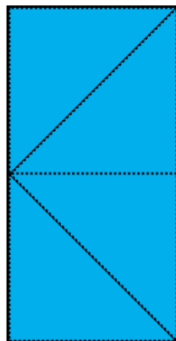
The area of this square is
____ triangles.



The area of this square is
____ triangles.



The area of this rectangle is
____ triangles.



The area of this rectangle is
____ triangles.

