

MATH REVIEW

Final Mastery Assessment • Connect

Objective: *Review addition.*

DO THIS Find each sum.

ADD Find each sum.

1 $5 + 3 = \square$

2 $6 + 2 = \square$


3 $8 + 1 = \square$

4 $7 + 1 = \square$

5 $7 + 3 = \square$

6 $6 + 1 = \square$

COUNT AND WRITE Write how many.



I feel: ready almost need help

TEACHER EDITION

MATH REVIEW

QUARTER 4 • WEEK 36

Final Mastery Assessment • Connect

Objective: *Review addition.*

DO THIS Find each sum.

ADD Find each sum.

1 $5 + 3 = \underline{8}$

2 $6 + 2 = \underline{8}$

3 $8 + 1 = \underline{9}$

4 $7 + 1 = \underline{8}$


5 $7 + 3 = \underline{10}$


6 $6 + 1 = \underline{7}$

COUNT AND WRITE Write how many.

1  → 15

2 

3  → 13

4 

TEACHER NOTES Answer key & guidance

Answers: see page
Common error: Treating the picture and the symbol as unrelated.

Strategy: Link the model to the numeral or equation aloud.
Prompt: "Show me how you know."

I feel: ready almost need help

