

## NUMERALS & QUANTITY

LABORATORY · L3

Numeral Formation • Apply

Objective: Use numerals with real groups.

**DO THIS** Count each group. Circle the right numeral.

**MATCH THE NUMERAL** Circle the matching numeral.


1  0 7 9


2 0 1 2


3  5 9 10

4  2 6 9

**COUNT AND WRITE** Write the number.

1  →

2  →

3  →

4  →

I can:  read it  trace it  write it

TEACHER EDITION

## NUMERALS & QUANTITY

LABORATORY · L3

Numeral Formation • Apply

Objective: Use numerals with real groups.

**DO THIS** Count each group. Circle the right numeral.

**MATCH THE NUMERAL** Circle the matching numeral.

1  0 7 9


2  0 1 2

3  5 9 10

4  2 6 9

**COUNT AND WRITE** Write the number.

1  →

2  →

3  →

4  →

**TEACHER NOTES** Answer key & guidance

Answers: see page

Strategy: Read each situation aloud; let the child interpret first.

Common error: Choosing an operation before understanding the situation.

Prompt: "Show me how you know."

I can:  read it  trace it  write it