

GEOMETRY & SHAPES

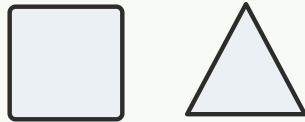
LABORATORY • L8

Shape Composition • Explain

Objective: *Tell why two shapes are different.*

DO THIS Explain how a square and a triangle differ.

PROVE Compare sides and corners.



A square has 4 sides. A triangle has 3.

COUNT AND COMPARE Write the sides for each.



sides:



sides:



sides:



sides:

I named shapes by: sides corners how they look

TEACHER EDITION

GEOMETRY & SHAPES

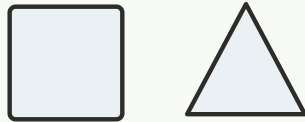
LABORATORY • L8

Shape Composition • Explain

Objective: *Tell why two shapes are different.*

DO THIS Explain how a square and a triangle differ.

PROVE Compare sides and corners.



A square has 4 sides. A triangle has 3.


COUNT AND COMPARE Write the sides for each.

1



sides: 4

2



sides: 0

3



sides: 3

4



sides: 4

TEACHER NOTES Answer key & guidance

Answers: see page

Strategy: Accept matching, counting, or rebuilding as valid proof.

Common error: Accepting an answer without checking it.

Prompt: "Show me how you know."

I named shapes by: sides corners how they look

