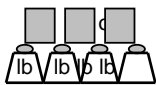


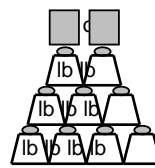
Using a scale (pounds and ounces)

Grade 3 Measurement Worksheet

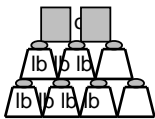
Fill in the blanks.



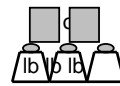
The school bag weighs
____ lb ____ oz.



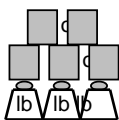
The watermelon weighs
____ lb ____ oz.



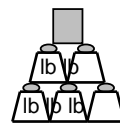
The flower pot weighs
____ lb ____ oz.



The teapot weighs
____ lb ____ oz.



The cat weighs
____ lb ____ oz.



The basketball weighs
____ lb ____ oz.

Which object is the heaviest? _____