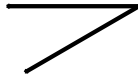


**Classifying angles (acute / obtuse / right)**

Grade 4 Geometry Worksheet

Classify the angles as acute, obtuse or right.

1)



\_\_\_\_\_

2)



\_\_\_\_\_

3)



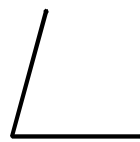
\_\_\_\_\_

4)



\_\_\_\_\_

5)



\_\_\_\_\_

6)



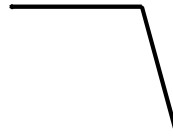
\_\_\_\_\_

7)



\_\_\_\_\_

8)



\_\_\_\_\_

9)

\_\_\_\_\_

Draw and label one acute, one obtuse and one right angle.