

## MEASUREMENT & TIME

QUARTER 4 • WEEK 33

Money and Measurement • Fluency


Objective: *Build quick recall with related facts.*


**DO THIS** Complete each set. Look for the pattern.


**STRATEGY** Use what you already know.


Related facts help you remember.

**FACT SETS** Match each group to its numeral

1  →

2  →

3  →

4 

**FACT SETS** One more than each number

$0 + 1 = \square$

$1 + 1 = \square$

$2 + 1 = \square$

$3 + 1 = \square$

$4 + 1 = \square$

$5 + 1 = \square$

$6 + 1 = \square$

$7 + 1 = \square$

**NUMBER TRACK** Fill in the missing numbers.

1 2 3  5 6 7   10

**ACCURACY CHECK** How did you do?

Correct:  Corrected:

TEACHER EDITION

## MEASUREMENT & TIME

QUARTER 4 • WEEK 33

Money and Measurement • Fluency


Objective: *Build quick recall with related facts.*


**DO THIS** Complete each set. Look for the pattern.


**STRATEGY** Use what you already know.


Related facts help you remember.

**FACT SETS** Match each group to its numeral

1  → 1

2  → 3

3  → 5

4 

**FACT SETS** One more than each number

$0 + 1 = \underline{1}$

$1 + 1 = \underline{2}$

$2 + 1 = \underline{3}$

$3 + 1 = \underline{4}$

$4 + 1 = \underline{5}$

$5 + 1 = \underline{6}$

$6 + 1 = \underline{7}$

$7 + 1 = \underline{8}$

**NUMBER TRACK** Fill in the missing numbers.

1
2
3
4
5
6
7
8
9
10

**ACCURACY CHECK** How did you do?

Correct:  Corrected:

