

GEOMETRY & SHAPES

QUARTER 3 • WEEK 27

Geometry and Review • Fluency


Objective: *Build quick recall with related facts.*

DO THIS Complete each set. Look for the pattern.


STRATEGY Use what you already know.

Related facts help you remember.

FACT SETS Match each group to its numeral

1  →

2  →

3  →

4  →

FACT SETS One more than each number

$0 + 1 = \square$

$1 + 1 = \square$

$2 + 1 = \square$

$3 + 1 = \square$

$4 + 1 = \square$

$5 + 1 = \square$

$6 + 1 = \square$

$7 + 1 = \square$

NUMBER TRACK Fill in the missing numbers.

1 4 5 7 8 9 10

ACCURACY CHECK How did you do?

Correct: Corrected:



TEACHER EDITION

GEOMETRY & SHAPES

QUARTER 3 • WEEK 27

Geometry and Review • Fluency


Objective: *Build quick recall with related facts.*

DO THIS Complete each set. Look for the pattern.

STRATEGY Use what you already know.

Related facts help you remember.

FACT SETS Match each group to its numeral

1  → 5

2  → 2

3  → 2

4  → 2

FACT SETS One more than each number

$0 + 1 = \underline{1}$

$1 + 1 = \underline{2}$

$2 + 1 = \underline{3}$

$3 + 1 = \underline{4}$

$4 + 1 = \underline{5}$

$5 + 1 = \underline{6}$

$6 + 1 = \underline{7}$

$7 + 1 = \underline{8}$

NUMBER TRACK Fill in the missing numbers.

1
2
3
4
5
6
7
8
9
10

ACCURACY CHECK How did you do?

Correct: Corrected:

