

RELATIONAL ADDITION

QUARTER 3 • WEEK 24

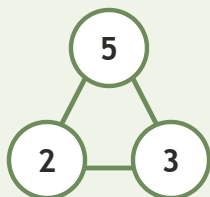
Addition Strategy Paths • Connect

Objective: *Connect addition to its number family.*

DO THIS Use the three numbers to write the fact.

CONNECT Whole and two parts.

EXAMPLE



NUMBER FAMILIES Write the fact.

1

$1 + 1 = \square$

2

$8 + 1 = \square$

3

$6 + 4 = \square$

4

$9 + 1 = \square$

To add 1: counted all counted on made ten

TEACHER EDITION

RELATIONAL ADDITION

QUARTER 3 • WEEK 24

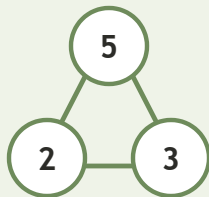
Addition Strategy Paths • Connect

Objective: *Connect addition to its number family.*

DO THIS Use the three numbers to write the fact.

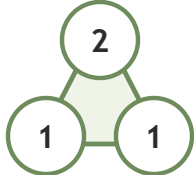
CONNECT Whole and two parts.

EXAMPLE



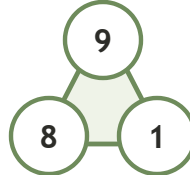
NUMBER FAMILIES Write the fact.

1



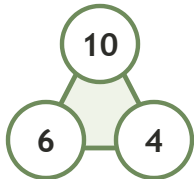
$$1 + 1 = \underline{2}$$

2



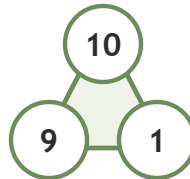
$$8 + 1 = \underline{9}$$

3



$$6 + 4 = \underline{10}$$

4



$$9 + 1 = \underline{10}$$

TEACHER NOTES Answer key & guidance

Answers: see page
Common error: Treating the picture and the symbol as unrelated.

Strategy: Link the model to the numeral or equation aloud.
Prompt: "Show me how you know."

To add I: counted all counted on made ten

